

THE 13 ORIGINALS

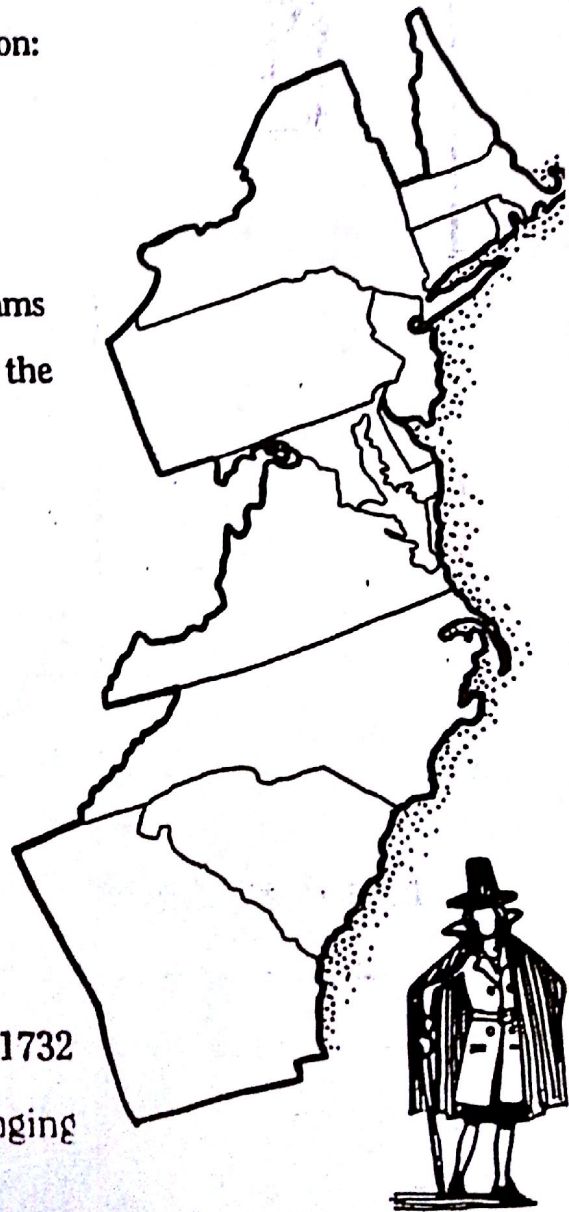
The original thirteen colonies are pictured on the map using the current boundaries of the states that grew from them. Use the map and other references to complete the following:



- I. Label each of the thirteen English colonies on the map.
- II. Shade the three groups of colonies: New England (green); Middle (orange); Southern (yellow).
- IV. Locate and label the following sites: Salem; Providence; Jamestown; Williamsburg; Boston; Plymouth; Savannah; Hartford; New Haven; Portsmouth; Philadelphia; and Charleston.

V. Tell which of the original thirteen colonies fits each description:

- _____ 1. The first colony founded
- _____ 2. Home to Jamestown, first settlement
- _____ 3. Originally known as New Sweden
- _____ 4. Formed by Puritan preacher, Roger Williams
- _____ 5. Home of Harvard, the first university in the new world
- _____ 6. Two colonies where tobacco was an important crop
- _____ 7. Originally called New Netherland
- _____ 8. Formed for people who couldn't pay their debts
- _____ 9. Had first elected lawmaking body, House of Burgesses
- _____ 10. Founded for Quakers by William Penn
- _____ 11. Two colonies formed in 1663
- _____ 12. The last of the original 13, founded in 1732
- _____ 13. Banished Anne Hutchinson for challenging the authority of Puritan leaders







Name _____

PREACHERS, PROFITEERS, & PRISONERS

People made the long journey to the New World for different reasons. Some were in debt or in trouble and wanted a new life. Some were escaping religious persecution. Others wanted gold or hoped for other riches. The original thirteen colonies are often grouped according to geographic location as the New England Colonies, the Middle Colonies, and the Southern Colonies. Another way of grouping these colonies is to look at the reasons for their founding.

I. Place each of the thirteen colonies in one or more of the categories below according to reasons for its founding. Use your history textbook, encyclopedia, or any other resources you need.

RELIGIOUS FREEDOM	PROFIT AND TRADE	POLITICAL FREEDOM	HOME FOR DEBTORS
			

II. Make two generalizations from these groupings.

Name _____